

C4-R4: ADVANCED ALGORITHMS

NOTE:

1. Answer question 1 and any FOUR from questions 2 to 7.
2. Parts of the same question should be answered together and in the same sequence.

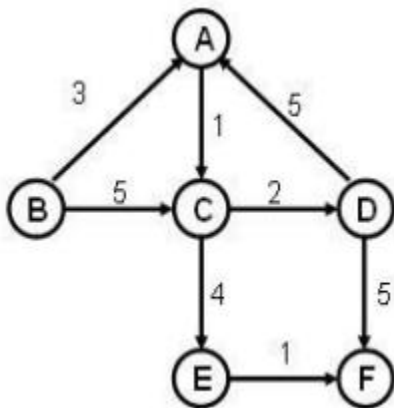
Time: 3 Hours

Total Marks: 100

1.
 - a) Define an algorithm. List various criteria used for analyzing an algorithm
 - b) Use a recursion tree to give an asymptotically tight solution to the recurrence $T(n) = T(\alpha n) + T((1 - \alpha)n) + cn$, where α is a constant in the range $0 < \alpha < 1$ and $c > 0$ is also a constant.
 - c) Solve following recurrence using master method $T(n) = 9T(n/3) + n$
 - d) Show how quick sort can be made to run in $O(n \lg n)$ time in the worst case.
 - e) Explain in brief characteristics of greedy algorithms. Compare Greedy Method with Dynamic Programming Method.
 - f) Define time complexity and space complexity of an algorithm.
 - g) Differentiate Backtracking and Branch and bound.

(7x4)

2.
 - a) Execute the Dijkstra's algorithm on the following graph, with single-source B.

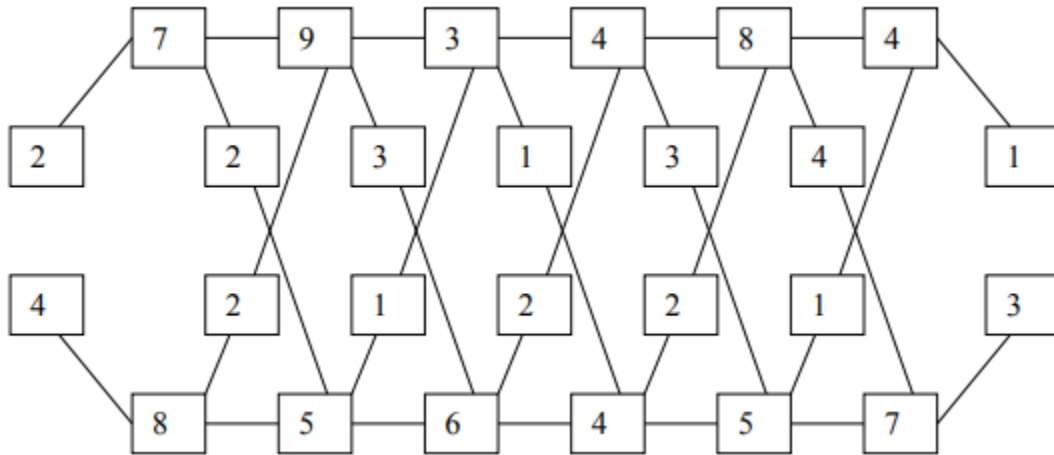


- b) Find Upper bound of following recurrence equation using Recurrence Tree Method.
 $T(n) = 2T(n/2) + cn^2$

(9+9)

3.

- a) A car assembly plant having two assembly lines with six stations on each the time required by each station is given below in figure:



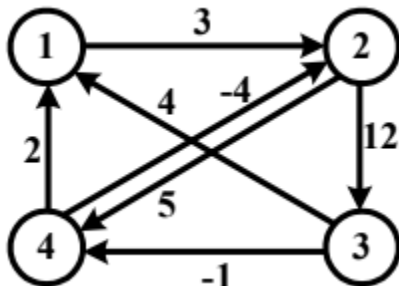
If entry & exit time for line 1 is 2, 1 and for line 2 is 4, 3 then find optimal path & time by which car can be moved within assembly plant.

- b) Explain how to find Longest Common Subsequence of two strings using Dynamic Programming Method.

(9+9)

4.

- a) Which algorithm is used for computing the greatest common divisor of two integers? Find out GCD (27, 31) using extended Euclid algorithm.
- b) A directed weighted graph is given as below. Find all pair shortest path using Floyd Algorithm.



(9+9)

5.

- a) Using algorithm find an optimal parenthesis of a matrix chain product whose sequence of dimension is (3, 2, 5, 3, 4, 4)
- b) What is a max heap? What is a min heap? What are some real life applications of heap? What is the complexity of heap sort?

(9+9)

6.

- a) Explain the main features of Boyer-Moore algorithm.
- b) Solve the following Knapsack Problem using Greedy Algorithm. There are five items whose weights and prices are given in following table. The capacity of the knapsack is 100 kg.

Item	1	2	3	4	5
Weight (kg)	30	40	10	50	20
Price (\$)	40	66	20	60	30
Value/weight	1.0	2.2	2.0	1.2	1.5

- c) What do you mean by polynomial time complexity and logarithmic complexity? Which one is higher?

(6+6+6)

7.

- a) Explain Warshall's algorithm using an example.
- b) Explain Traveling salesman problem with example.

(9+9)