

Administration Office

Booklet No.:

EXAMINATION QUESTION BOOKLET

510026

Duration: 90 minutes

Test Booklet Series: A

Roll No.:

--	--	--	--	--

Answer Sheet No

--	--	--	--	--

Name of Candidate

Signature of candidate

उम्मीदवारों के लिए निर्देश

Instructions for Candidate

इस प्रश्न-पुस्तिका में 85 बहुविकल्पीय प्रश्न हैं। प्रत्येक प्रश्न के चार विकल्प दिए गए हैं (A), (B), (C) और (D)। प्रत्येक प्रश्न का केवल एक सही विकल्प है। सही विकल्प का चुनाव करे और प्रश्न के सामने वाले सही गोले को उत्तर पुस्तिका में काला करें।	This booklet consists of 85 Multiple choice questions. Each question has 4 (four) alternatives (A), (B), (C), and (D). In any case only one alternative will be the correct answer. Choose the right alternative and darken the appropriate circle in the answer sheet in front of the related question.
प्रत्येक सही उत्तर के लिए 1 अंक दिया जाएगा, गलत देने पर 0.25 अंक काट लिया जाएगा।	For each correct answer One mark will be given and for each incorrect answer 0.25 mark will be deducted.
गोले को काला करने के लिए केवल काले/नीले बॉल प्वाइंट पेन का प्रयोग करें। गोले को एक बार काला करने के बाद इसको मिटाना या बदलना नहीं है। किसी प्रश्न का एक से ज्यादा गोले काले करने पर मशीन द्वारा इसके लिए शून्य अंक दिया जाएगा।	Use Black/Blue ball point Pen to darken the circle..Answer once darkened is not allowed to be erased or altered. Against any question if more than one circle is darkened, machine will allot zero mark for that question.
ओएमआर उत्तर पुस्तिका में सभी जानकारी देते हुए सही गोले को काला करे। दिए गए निर्देशों के अनुसार आप सही गोले को काला करने में असफल रहते हैं तो आपके उत्तर पुस्तिका की जाँच नहीं की जाएगी।	In OMR answer sheet candidate must fill up all required information and for this candidate must darken the appropriate circle. The OMR Answer sheet will not be evaluated if the candidate fails to fill up the required circles correctly as per the given directions.
उत्तर-पुस्तिका में सूचनाओं को भरने से पहले, उत्तर-पुस्तिका में दिए गए निर्देशों को ध्यानपूर्वक पढ़िए। उत्तर-पुस्तिका को किसी भी तरह से न मोड़ें।	Read the instructions printed on Answer sheet carefully before filling the information on the answer Sheet. Do not fold answer sheet in any case.
प्रश्नों का उत्तर देने से पहले यह जाँच कर लें कि उत्तर-पुस्तिका और प्रश्न-पुस्तिका में आपने सारी जानकारी भर दी है।	Before beginning to answer the questions please make sure that all entries on OMR answer-sheet and Test Question booklet have been duly completed.
परीक्षार्थी अपनी उत्तर पुस्तिका पत्र निरीक्षक को सौंपे बिना परीक्षा-हॉल नहीं छोड़ सकता है और उपस्थिती पत्रिका पर हस्ताक्षर करना अनिवार्य है। ऐसा नहीं करने पर अयोग्य घोषित कर दिया जाएगा।	Candidate should not leave the examination hall/room without handing over his Answer sheet to the invigilator and without signing on the attendance sheet. Failing in doing so, will amount to disqualification.
प्रश्न-पुस्तिका को खोलने के निर्देश मिलने के पश्चात एवं उत्तर देने से पहले उम्मीदवार यह जाँच कर ले कि प्रश्न-पुस्तिका पूर्ण है।	After receiving the instruction to open the booklet and before answering the questions, the candidate should ensure that the Question booklet is complete.
नोट : परीक्षा पुस्तिका के हिन्दी संस्करण में यदि कोई विसंगति पाई जाती है, तो अंग्रेजी संस्करण मान्य होगा। Note : In case of discrepancy in Hindi language, English version will be treated as final	

जब तक आपसे कहा न जाए तब तक प्रश्न-पुस्तिका न खोलें।

DO NOT OPEN THE QUESTION BOOKLET UNTIL YOU ARE TOLD TO DO SO.

Directions: Choose the most appropriate option.

Directions : In the following questions, a part of the sentence is printed in bold. Below are given alternatives to the bold part at (A), (B) and (C) which may improve the sentence. Choose the correct alternative. In case no improvement is needed, your answer is (D).

1. Sordid and sensational books tend to **vitate** the public taste.
(A) divide (B) distract
(C) distort (D) No improvement
2. **By studying** AIDS has engaged many researchers in the last decade.
(A) Important study (B) Now that the study
(C) The study of (D) No improvement
3. His Master's thesis was **highly estimated** and is now being prepared for publication.
(A) was highly discussed
(B) was highly commended
(C) is highly appraised
(D) No improvement

Directions: Questions are based on passage below.

Harold a professional man who had worked in an office for many years had a fearful dream. In it, he found himself in a land where small slug-like animals with slimy tentacles lived on people's bodies. The people tolerated the loathsome creatures because after many years they grew into elephants which then became the nation's system of transport, carrying everyone wherever he wanted to go. Harold suddenly realised that he himself was covered with these things, and he woke up screaming. In a vivid sequence of pictures this dream dramatised for Harold what he had never been able to put in to words; he saw himself as letting society feed on his body in his early years so that it would carry him when he retired. He later threw off the "security bug" and took up freelance work.

4. In his dream Harold found the loathsome creatures
(A) in his village (B) in his own house
(C) in a different land (D) in his office

5. Which one of the following phrases best helps to bring out the precise meaning of 'loathsome creatures'?

- (A) Security bug and slimy tentacles
(B) Fearful dream and slug-like animals
(C) Slimy tentacles and slug-like animals
(D) slug-like animals and security bug

6. The statement that 'he later threw off the security bug' means that

- (A) Harold succeeded in overcoming the need for security
(B) Harold stopped giving much importance to dreams
(C) Harold started tolerating social victimisation
(D) Harold killed all the bugs troubled him

7. Harold's dream was fearful because

- (A) it brought him face to face with reality
(B) it was full of vivid pictures of snakes
(C) he saw huge elephant in it
(D) in it he saw slimy creatures feeding on people's bodies

8. "Whatever Dev uttered was without rhyme or reason" means

- (A) Dev could not recite any poem or speech
(B) Dev said something which has no meaning, it was totally baseless
(C) Dev was talking something which was beyond our experience
(D) Dev spoke flatly without any emotion or reason

Directions: Choose the most appropriate option.

9. A 'slip of the tongue' means something said

- (A) wrongly by choice
(B) unintentionally
(C) without giving proper thought
(D) to hurt another person

10. Please identify the synonym of the word: CORPULENT

- (A) Lean (B) Gaunt
(C) Emaciated (D) Obese

11. एक व्यक्ति 6 घंटे में 5 कि. मी. प्रति घंटे और 12 घंटे में 4 कि. मी./प्रति घंटे की दूरी तय करता है तो उसकी औसत गति है
- (A) $4 \frac{1}{3}$ प्रति कि. मी. प्रति घंटा
(B) $9 \frac{2}{3}$ प्रति कि. मी. प्रति घंटा
(C) $9\frac{1}{2}$ प्रति कि. मी. प्रति घंटा
(D) 8 प्रति कि. मी. प्रति घंटा

A man walks at 5 kmph for 6hr and at 4km/h for 12hr. His average speed is

- (A) $4 \frac{1}{3}$ km/h (B) $9 \frac{2}{3}$ km/h
(B) $9 \frac{1}{2}$ km/h (D) 8 km/h

12. दो रेलों की गति का अनुपात 7:8 है। यदि दूसरी 4 घंटे में 440 कि. मी. चलती है तो पहली रेल की गति है :

- (A) 47.4 प्रति कि. मी. प्रति घंटा
(B) 57.19 प्रति कि. मी. प्रति घंटा
(C) 48.13 प्रति कि. मी. प्रति घंटा
(D) 96.25 प्रति कि. मी. प्रति घंटा

The ratio between the speeds of two trains is 7: 8. If the second train runs 440 kms in 4 hours, then the speed of the first train is:

- (A) 47.4 km/hr (B) 57.19 km/hr
(C) 48.13 km/hr (D) 96.25 km/hr

13. यदि 34 पुरुष एक दिन में 9 घंटे कार्य करते हुए 8 दिनों में कार्य का $\frac{2}{5}$ हिस्सा पूरा करते हैं। शेष कार्य को एक दिन में 9 घंटे कार्य करते हुए 6 दिनों में कितने पुरुष पूरा करने के लिए तैनात किए जाने चाहिए ?

- (A) 189 (B) 198
(C) 102 (D) 142

If 34 men completed $\frac{2}{5}$ th of a work in 8 days working 9 hours a day. How many more man should be engaged to finish the rest of the work in 6 days working 9 hours a day?

- (A) 189 (B) 198
(C) 102 (D) 142

14. कामगार ए को एक कार्य करने में 8 घंटे का समय लगता है। कामगार बी को यही कार्य करने में 10 घंटे का समय लगता है। ए और बी को एक साथ मिलकर इसी कार्य स्वतंत्र रूप से करने में कितना समय लगेगा ?

- (A) 40/0 दिन (B) 40/7 दिन
(C) 7.5 दिन (D) 8.5 दिन

Worker A takes 8 hours to do a job. Worker B takes 10 hours to do the same job. How long it take both A & B, working together but independently, to do the same job?

- (A) 40/9 days (B) 40/7 days
(C) 7.5 days (D) 8.5 days

15. क्रिकेट के खेल में शुरूआती 10 ओवरों में रन रेट केवल 3.2 था। शेष 40 ओवरों में 282 रनों का लक्ष्य पूरा करने के लिए रन बनाने की दर कितनी होनी चाहिए ?

- (A) 6.25 (B) 6.5
(C) 6.75 (D) 7

In the first 10 overs of a cricket game, the run rate was only 3.2. What should be the run rate in the remaining 40 overs to reach the target of 282 runs?

- (A) 6.25 (B) 6.5
(C) 6.75 (D) 7

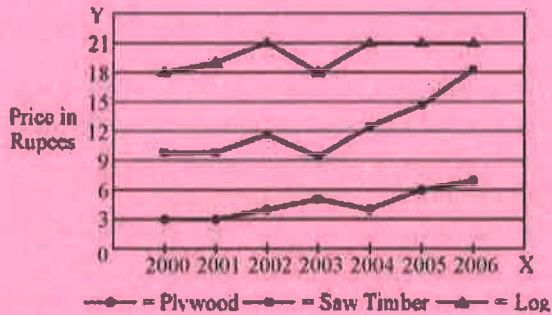
16. एक दुकानदार की बिक्री लगातार 5 माह तक 6435 रु., 6927 रु., 6855 रु., 7230 रु. और 6562 रु. है। छठे माह में उसकी बिक्री कितनी होनी चाहिए कि वह 6500 रु. की औसत बिक्री कर सके ?

- (A) रु. 4991 (B) रु. 5991
(C) रु. 6001 (D) रु. 6991

A grocer has a sale of Rs. 6435, Rs. 6927, Rs. 6855, Rs. 7230 and Rs. 6562 for 5 consecutive months. How much sale must he have in the sixth month so that he gets an average sale of Rs. 6500?

- (A) Rs. 4991 (B) Rs. 5991
(C) Rs. 6001 (D) Rs. 6991

नम्नलिखित चार्ट में लॉग का मूल्य प्रति घन मीटर और प्रति टन में प्लाइवुड और इमारती लकड़ी में दर्शाया गया है। चार्ट का अध्ययन करें और इन प्रश्नों के उत्तर दें।



17. इनमें से कौन सा उत्पाद एक समय अवधि में मूल्य की अधिकतम प्रतिशत वृद्धि दर्शाता है?

- A) इमारती लकड़ी
B) प्लाइवुड
C) लॉग
D) इनमें से कोई नहीं

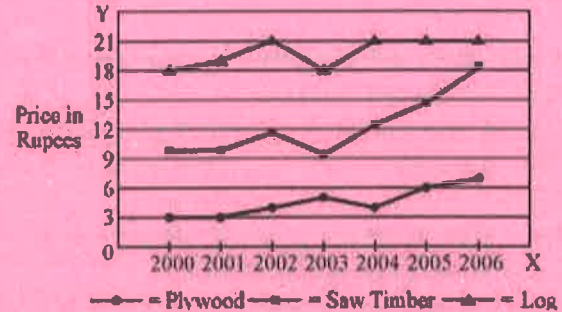
18. लॉग के प्रति घन मीटर मूल्य में अधिकतम प्रतिशत वृद्धि कितनी है?

- (A) 6 (B) 12
(C) 18 (D) 20

19. किस वर्ष में दो उत्पादों का मूल्य बढ़ा और तीसरे का मूल्य बढ़ा?

- (A) 2000 (B) 2002
(C) 2003 (D) 2006

In the following chart, the price of logs is shown in per cubic metre and that of Plywood and Saw Timber in per tones. Study the chart and answer the following questions.



17. Which product shows the maximum percentage increase in price over the period?

- (A) Saw timber (B) Plywood
(C) Log (D) None of the above

18. What is the maximum percentage increase in price per cubic metre of log ?

- (A) 6 (B) 12
(C) 18 (D) 20

19. In which year the prices of two products increased and that of the third increased ?

- (A) 2000 (B) 2002
(C) 2003 (D) 2006

सुबह 10 बजे से 10:20 बजे तक एक मिनट के अंतराल पर कुछ परिवर्ती X के मापन किए गए थे। इस प्रकार प्राप्त डेटा निम्नानुसार है : X :

60, 62, 65, 64, 63, 61, 66, 65, 70, 68,
63, 62, 64, 69, 65, 64, 66, 67, 66, 64

20. X का मूल्य, जो मापन की अवधि में समय से 10 प्रतिशत अधिक है, वह है?

- (A) 69
- (B) 68
- (C) 67
- (D) 66

21. X का मूल्य, जो मापन की अवधि में समय से 90 प्रतिशत अधिक होता है वह है?

- (A) 63
- (B) 62
- (C) 61
- (D) 60

22. X का मूल्य, जो मापन की अवधि में समय से 50 प्रतिशत अधिक होता है वह है?

- (A) 66
- (B) 65
- (C) 64
- (D) 63

Measurements of some variable X were made at an interval of 1 minute from 10 A.M. to 10:20 A.M.

The data, thus, obtained is as follows : X :

60, 62, 65, 64, 63, 61, 66, 65, 70, 68,
63, 62, 64, 69, 65, 64, 66, 67, 66, 64

20. The value of X , which is exceeded 10% of the time in the duration of measurement, is

- (A) 69
- (B) 68
- (C) 67
- (D) 66

21. The value of X , which is exceeded 90% of the time in the duration of measurement, is

- (A) 63
- (B) 62
- (C) 61
- (D) 60

22. The value of X , which is exceeded 50% of the time in the duration of measurement, is

- (A) 66
- (B) 65
- (C) 64
- (D) 63

इस तालिका में 2006 से 2010 की अवधि के दौरान एक कारखाने में इलेक्ट्रॉनिक मर्दों (टीवी और एलसीडी) के उत्पादन दर्शाए गए हैं। तालिका का सावधानी पूर्वक अध्ययन करें और इन प्रश्नों के उत्तर दें।

वर्ष	2006	2007	2008	2009	2010
टीवी	6000	9000	13000	11000	8000
एलसीडी	7000	9400	9000	10000	12000

23. किस वर्ष में इलेक्ट्रॉनिक मर्दों का कुल उत्पादन अधिकतम था?

- (A) 2006
(B) 2007
(C) 2008
(D) 2010

24. 2006 से 2008 के बीच एलसीडी और टीवी के उत्पादन के औसतों के बीच क्या अंतर है?

- (A) 3000
(B) 2867
(C) 3015
(D) इनमें से कोई नहीं

25. वर्ष 2010 में एलसीडी के उत्पादन की तुलना में टीवी का उत्पादन किस वर्ष में आधा हुआ है?

- (A) 2007
(B) 2006
(C) 2009
(D) 2008

26. वर्ष 2008 और 2010 में एलसीडी के उत्पादन का क्या अनुपात है?

- (A) 4 : 3
(B) 3 : 4
(C) 1 : 3
(D) 2 : 3

27. वर्ष 2006 और 2007 में टीवी का उत्पादन का क्या अनुपात है?

- (A) 6 : 7
(B) 7 : 6
(C) 2 : 3
(D) 3 : 2

The following table presents the production of electronic items (TVs and LCDs) in a factory during the period from 2006 to 2010. Study the table carefully and answer the following questions.

Year	2006	2007	2008	2009	2010
TV	6000	9000	13000	11000	8000
LCDs	7000	9400	9000	10000	12000

23. In which year, the total production of electronic items was maximum?

- (A) 2006 (B) 2007
(C) 2008 (D) 2010

24. What is the difference between averages of production of LCDs and TVs from 2006 to 2008?

- (A) 3000 (B) 2867
(C) 3015 (D) None of above

25. What is the year in which production of TVs is half the production of LCDs in the year 2010?

- (A) 2007 (B) 2006
(C) 2009 (D) 2008

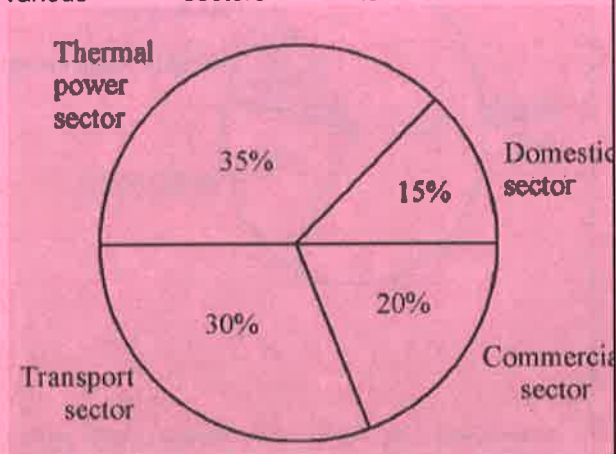
26. What is the ratio of production of LCDs in the years 2008 and 2010?

- (A) 4 : 3 (B) 3 : 4
(C) 1 : 3 (D) 2 : 3

27. What is the ratio of production of TVs in the years 2006 and 2007?

- (A) 6 : 7 (B) 7 : 6
(C) 2 : 3 (D) 3 : 2

The total CO₂ emissions from various sectors are 5 mmt. In the Pie Chart given below, the percentage contribution to CO₂ emissions from various sectors is indicated.



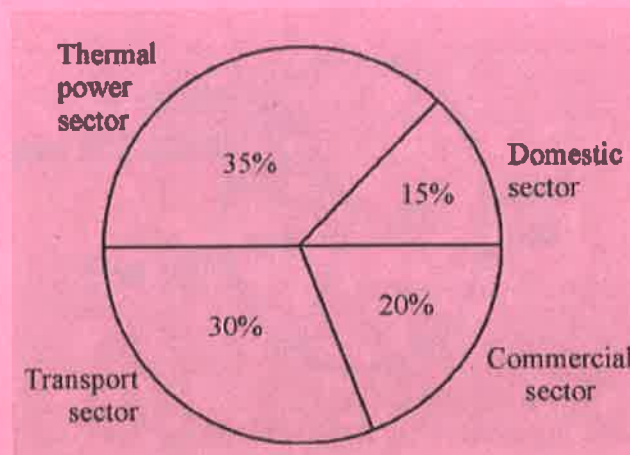
28. What is the absolute CO₂ emission from domestic sector?

- (A) 1.85 mmt (B) 2.5 mmt
(C) 2.75 mmt (D) 0.75 mmt

29. What is the absolute CO₂ emission for combined thermal power and transport sectors?

- (A) 3.25 mmt (B) 2.5 mmt
(C) 2.8 mmt (D) 4.2 mmt

विभिन्न क्षेत्रों से कुल कार्बन डाइऑक्साइड उत्सर्जन 5 एमएमटी है। नीचे दिए गए पाई चार्ट में विभिन्न क्षेत्रों से कार्बनडाइ उत्सर्जन में प्रतिशत योगदान इस प्रकार दर्शाया गया है।



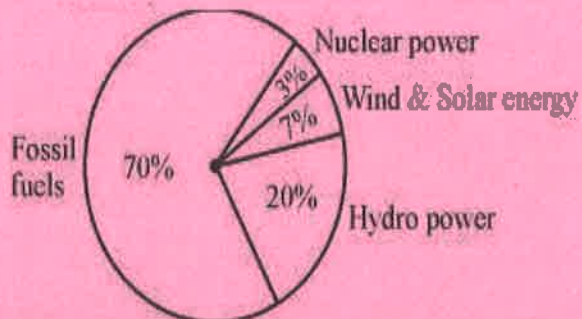
28. घरेलू क्षेत्र से परम कार्बनडाइऑक्साइड उत्सर्जन कितना है?

- (A) 1.85 एमएमटी
(B) 2.5 एमएमटी
(C) 2.75 एमएमटी
(D) 0.75 एमएमटी

29. संयुक्त तापीय विद्युत और परिवहन क्षेत्रों के लिए परम कार्बनडाइ उत्सर्जन कितना है?

- (A) 3.25 एमएमटी
(B) 2.5 एमएमटी
(C) 2.8 एमएमटी
(D) 4.2 एमएमटी

The total electricity generation in a country is 97 GW. The contribution of various energy sources is indicated in percentage terms in the Pie Chart given below ;



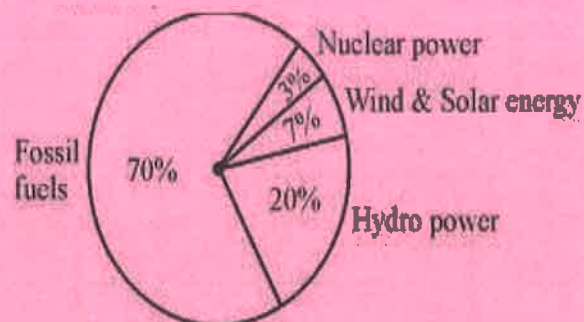
30. What is the contribution of wind and solar power in absolute terms in the electricity generation?

- (A) 6.79 GW (B) 9.4 GW
(C) 19.7 GW (D) 29.1 GW

31. What is the contribution of renewable energy sources in absolute terms in the electricity generation ?

- (A) 09.1 GW (B) 26.19 GW
(C) 67.9 GW (D) 97 GW

देश में कुल बिजली उत्पादन 97 गीगावॉट है। दिए गए पाई चार्ट में प्रतिशत में विभिन्न ऊर्जा स्रोतों का योगदान बताया गया है।



30. विद्युत उत्पादन में परम संदर्भ में पवन और सौर विद्युत का कितना योगदान है?

- (A) 6.79 गीगावॉट
(B) 9.4 गीगावॉट
(C) 19.7 गीगावॉट
(D) 29.1 गीगावॉट

31. विद्युत उत्पादन में परम संदर्भ में नवीकरणीय ऊर्जा स्रोतों का कितना योगदान है?

- (A) 09.1 गीगावॉट
(B) 26.19 गीगावॉट
(C) 67.9 गीगावॉट
(D) 97 गीगावॉट

32 _____ कंप्यूटर से जुड़े यंत्रों को शक्ति प्रदान करता है.

- A) सी पी यू B) मदरबोर्ड
C) यू एस बी D) एस एम पी एस

_____ provides power to the computer peripherals.

- A) CPU B) Mother board
C) USB D) SMPS

33 चयनित टेक्स्ट को दोहरा रेखांकित करने के लिए किस शॉर्टकट कुंजी का उपयोग होता है?

- A) Ctrl+D B) Ctrl+U
C) Ctrl+Shift+U D) Ctrl+Shift+D

In which shortcut key is used to double underline the selected text?

- A) Ctrl+D B) Ctrl+U
C) Ctrl+Shift+U D) Ctrl+Shift+D

34. एक दूसरे को नहीं छूने वाले कई सेल या सीमा परिसर को चुनने के लिए, आपको चुनते समय _____.

- A) CTRL कुंजी को दबाकर रखना पड़ता है
B) SHIFT कुंजी को दबाकर रखना पड़ता है
C) ALT कुंजी को दबाकर रखना पड़ता है
D) CTRL + SHIFT कुंजी को दबाकर रखना पड़ता है

To select several cells or ranges that are not touching each other, you would _____ while selecting.

- A) hold down the CTRL key
B) hold down the SHIFT key
C) hold down the ALT key
D) hold down CTRL + SHIFT

35 _____ का उद्देश्य है कि उपयोगकर्ता या संसाधन के स्थान की परवाह किए बिना प्रोग्राम, डेटा और कंप्यूटर से जुड़े साधनों को नेटवर्क में सबको उपलब्ध कराना.

- A) विश्वसनीयता (रीलाइअबिलिटी)
B) संसाधन सहभाजन (रिसोर्स शेयरिंग)
C) कम्प्यूटिंग
D) प्रिंटिंग

Aim of _____ is to make all programs, data and peripherals available to anyone on the network irrespective of the physical location of the resources and the users

- A) Reliability
B) Resource sharing
C) Computing
D) Printing

36 एक स्लाइड हैण्डआउट की अधिकतम संख्या धारण कर सकती है:

- A) चार B) छः
C) नौ D) बारह

The maximim number of handouts that a slide contain are _____.

- A) four B) Six
C) Nine D) Twelve

37. एक कार मालिक ने लगातार 3 वर्षों में 7.50 रु., 8 रु. और 8.50 रु. प्रति ली. की दर से पेट्रोल खरीदा। यदि वह प्रत्येक वर्ष 4000 रु. खर्च करता है तो उसने प्रति लीटर पेट्रोल पर लगभग औसतन कितना खर्च किया ?

- (A) रु. 7.98 (B) रु. 6
(C) रु. 9.50 (D) रु. 9.5

A car owner buys petrol at Rs.7.50, Rs. 8 and Rs. 8.50 per litre for three successive years. What approximately is the average cost per litre of petrol if he spends Rs. 4000 each year?

- (A) Rs. 7.98 (B) Rs. 6
(C) Rs. 9.50 (D) Rs. 9.5

38. मूल्यांकन करें $\frac{(0.96)^3 - (0.1)^3}{(0.96)^2 + 0.096 + (0.1)^2}$

- (A) 0.86 (B) 0.95
(C) 0.97 (D) 1.06

The value of $\frac{(0.96)^3 - (0.1)^3}{(0.96)^2 + 0.096 + (0.1)^2}$ is:

- (A) 0.86 (B) 0.95
(C) 0.97 (D) 1.06

39. अभिव्यक्ति $(11.98 \times 11.98 + 11.98 \times x + 0.02 \times 0.02)$ एक्स के इसके बराबर होने पर पूर्ण वर्ग होगी।

- (A) 2.02 (B) 0.17
(C) 0.04 (D) 1.4

The expression $(11.98 \times 11.98 + 11.98 \times x + 0.02 \times 0.02)$ will be a perfect square for x equal to:

- (A) 2.02 (B) 0.17
(C) 0.04 (D) 1.4

40. 0.04×0.0162 इसके बराबर है

- (A) 2.02 (B) 0.17
(C) 0.04 (D) 1.4

0.04×0.0162 is equal to:

- (A) 6.48×10^{-8} (B) 6.48×10^{-4}
(C) 6.48×10^{-9} (D) 6.48×10^{-7}

41. The person is called an Adolescent as per Factory Act, 1948, if his age is

- (A) 16 years
(B) 14 to 18 years
(C) 15 to 18 years
(D) None of the above

42. Canteen is to provided in organization if the total employee is more than

- (A) 150 (B) 200
(C) 250 (D) 100

43. Which of the following is correct about 'anonymous donation'

- (A) It is voluntary contribution
(B) Person receiving such contribution maintain record of it
(C) Identity indicating the name & address of the person making such contribution
(D) All of the above

44. For claiming tax exemption under section 13A of the Income Tax Act, the political parties is required to maintain record if such voluntary contribution is of

- (A) any amount
(B) less than Rs. 20,000/-
(C) more than Rs. 20,000/-
(D) more than Rs. 25,000/-

45. The Bonus is payable if factory or any other establishment is employing the no. of workmen on any day during an accounting year

- (A) 20 or more (B) 15 or more
(C) 30 or more (D) 60 or more

46. The gratuity is payable to person who has rendered unblemish service to his employer for not less than
- (A) 3 years (B) 5 years
(C) 7 years (D) 15 years
47. Which of the following is correct relating to 'compassionate appointments'?
- (A) Reservation roster is applicable
(B) It can be made against future vacancy from waiting list
(C) There is time limit for compassionate appointments
(D) All are correct
48. The minimum eligibility for receipt of pension in a pensionable establishment is
- (A) 10 years (B) 15 years
(C) 20 years (D) Both (A) and (B)
49. Earned leave may be combined with which of the followings:
- (A) casual leave or maternity leave
(B) medical leave or casual leave
(C) study leave, maternity leave or medical leave
(D) none of the above
50. Under the Child Labour (Prohibition and Regulation) Act, 1986, n child shall be permitted to work between:
- (A) 08:00 P.M. to 08:00 A.M.
(B) 07:00 P.M. to 08:00 A.M.
(C) 09:00 P.M. to 09:00 A.M.
(D) None of the above
51. Provisional pension and provisional gratuity may be sanctioned in case of government servant is likely to retire before his pension or gratuity is finally assessed and settled by:
- (A) Pay and Accounts Officer
(B) Drawing & Disbursing Officer
(C) Head of Office
(D) Head of the Department
52. Children Education Allowance is payable to
- (A) All Central Government Servants without any pay limit
(B) Defence Personnel
(C) Railway Servants
(D) All of the above
53. Under the CCS (Conduct) Rules which of the following is Do's is expected from the government servants:
- (A) To observe courtesy and consideration to member of State Legislature
(B) To make joint representation in matter of common interest
(C) To support any illegal strike
(D) To take help of subordinates for standing surety for loans taken from private source
54. Which of the following acts, conduct or commission amounts to misconduct of government servant:
- (A) Strike
(B) Gherao
(C) Infidelity
(D) All of the above
55. To join education institution or course of studies for university degree prior permission or sanction of the prescribed authority is necessary under:
- (A) Rule 3, GID (4) (B) Rule 3, GID (7)
(C) Rule 3, GID (10) (D) Rule 8 (1)

56. For which of the following activities the permission / sanction of the appropriate authority is not required under CCS (Conduct) Rules:
- To seek redress of grievances arising out of employment in court of law.
 - To hold elective office in co-operative societies
 - To accept membership of Book Clubs run by foreign agencies.
 - All of the above
57. Which of the following activities is considered objectionable for the government servants:
- proposing the nomination of a candidate at an election
 - to be member of political party in democracy
 - to act as election agent, polling agent of a candidate at election
 - all of the above
58. If change of residence is involved and distance between old and new headquarters more than 1000 km and upto 2000 km, joining time admissible where transfer necessarily involves continuous travel by road for more than 200 km is
- 10 days
 - 12 days
 - 15 days
 - upto 7 days
59. Direct recruitment on all India basis by open competition is based on
- 100 point roster
 - 120 point roster
 - 200 point roster
 - No roster is applicable in such case
60. The SCs / STs reservation is applicable to which of the followings
- Ex-cadre post
 - Post filled by deputation
 - Temporary appointment for less than 45 days
 - Non-industrial unit
61. Which of the following periods of service not counted as qualifying service
- Service as SAS Apprentice
 - Service as Apprentice
 - Pre-appointment training followed immediately by appointment
 - All of the above
62. Which of the following is included in emoluments for pension
- Special allowance
 - Deputation allowance
 - Non-practising allowance
 - Personal pay
63. Additional quantum of pension shall be payable as and when the pensioner attains the age of 80 years to 85 years at rate of
- 20% of basic pension
 - 30% of basic pension
 - 40% of basic pension
 - 100% of basic pension
64. A government servant shall be deemed to have been placed under suspension by an order of appointing authority with effect from date of his conviction if he is sentenced to a term of imprisonment exceeding:
- 12 hours
 - 24 hours
 - 48 hours
 - Time is immaterial

65. Which of the following is not considered minor penalties under CCS (CCA) Rules
- (A) Censure
 - (B) Withholding his promotion
 - (C) Withholding of increments of pay
 - (D) Compulsory retirement
66. Pension from UNO is subject to taxation under Income Tax Act as
- (A) Not chargeable to tax
 - (B) Taxable on receipt basis
 - (C) Taxable on account basis
 - (D) Taxable
67. If the qualifying service is 5 years or more but less than 20 years the death of gratuity payable at rate of
- (A) 2 times of basic pay
 - (B) 6 times of basic pay
 - (C) 12 times of basic pay
 - (D) Not payable
68. While considering the cases of government servant for promotion, the Departmental Promotion Committee must take notice of
- (A) Govt. servant under suspension
 - (B) Govt. servant in respect of whom a charge-sheet has been issued
 - (C) Govt. servant in respect of prosecution for a criminal charge is pending
 - (D) All of the above
69. In a normal zone of consideration, field of choice from the eligible officer is to be kept by Departmental Promotion Committee as
- (A) Twice the no. of vacancies
 - (B) Thrice the no. of vacancies
 - (C) Twice the no. of vacancies + 4
 - (D) Thrice the no. of vacancies + 5
70. Willful absence from duty not covered by grant of leave will be treated as dies non for the purpose only of
- (A) increment
 - (B) leave
 - (C) pension
 - (D) all of the above
71. The government servant may be required to subscribe to provident fund, a family pension fund etc, in accordance with
- (A) FR-10
 - (B) FR-13
 - (C) FR-16
 - (D) FR-17
72. House Rent Allowance is payable with reference to
- (A) pay band
 - (B) pay band plus grade pay
 - (C) pay band plus grade pay plus non-practising allowance
 - (D) all of the above
73. Which terms and conditions for appointing retired officer as Inquiry Officer is not applicable
- (A) He should not be more than 70 years of age as 1st August of the empanelment year
 - (B) He may be entrusted inquiry on case to case basis
 - (C) He may conduct inquiry in the office premises only
 - (D) All is applicable
74. The charge sheet for major penalties under CCS (CCA) Rules to be issued under
- (A) Rule 10
 - (B) Rule 10 (5)(C)
 - (C) Rule 10(1)
 - (D) Rule 14
75. The standard form of order of suspension for government servant to be issued under CCS (CCA) Rules, 1965 under
- (A) Rule 10(1)
 - (B) Rule 10(2)
 - (C) Rule 10(C) & (4)
 - (D) Rule 14

76. For the case, where the government servant is already on leave or absent without prior permission, the order of suspension would be effective from
- Date of Order
 - Date of proceeding on leave
 - Date on which he returns from leave
 - Depends on nature of order
77. The authority competent to place a government servant under suspension under CCS(CCA) Rules, 1965 is
- Appointing Authority
 - The Disciplinary Authority
 - The Controlling Authority
 - (A) & (B) only
78. Which of the following deduction is enforced from the subsistence allowance compulsory
- Amount due on court attachment
 - House rent & allied charges
 - Subscription to GPF
 - All of the above
79. Where due to adequate availability of quarters of particular type, a government servant is allotted accommodation of a type higher than his entitlement, then license fee is payable
- flat rate
 - on the basis of basic pay
 - on the basis of grade pay
 - six times the normal rate of license fee
80. Conversion of one kind of leave into leave of a different kind is permissible only when applied for by the official while in service under:
- Rule 7(1)
 - Rule 7, GID(2)
 - Rule 10, GID
 - Rule 13
81. An interim or final order pertaining to industrial dispute passed by Industrial Tribunal or Labour Court is called
- Judgement
 - Decree
 - Order
 - Award
82. The temporary closure of place of employment or suspension of work is called
- Strike
 - Lock out
 - Lay off
 - None of the above
83. A person who has ultimate control over the affair of the factory is called
- Manager
 - Chairman
 - Managing director
 - Occupier
84. Creche is to be provided if female workers engaged in establishment is
- 15
 - 20
 - 25
 - 30
85. The space for every worker employed in the factory under the Factories Act, 1948 should be
- 10 cubic meter
 - 10.2 cubic meter
 - 14.2 cubic meter
 - 15 cubic meter